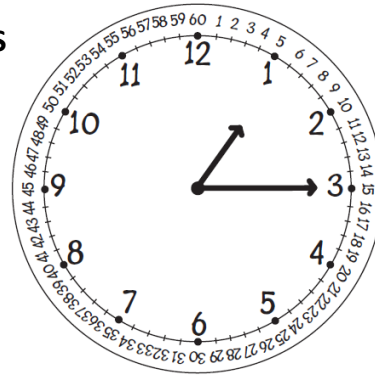
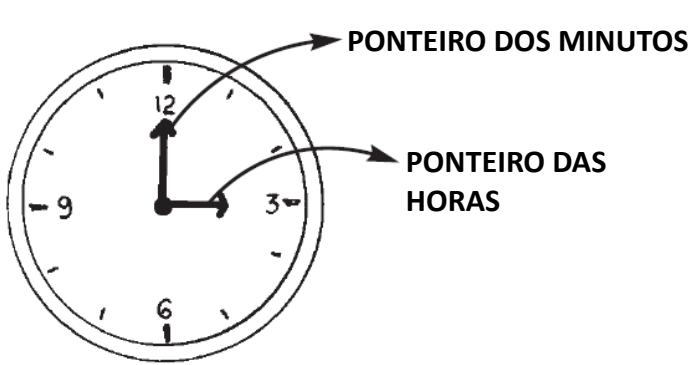


Nome : _____

INFORMAÇÃO :

Data : ___/___/___

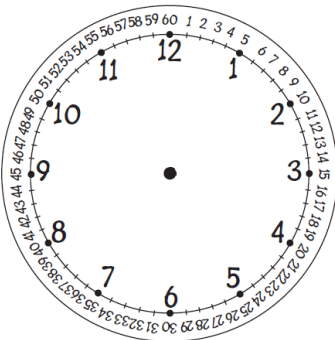
RELÓGIOS ANALÓGICOS APRENDER A LER AS HORAS



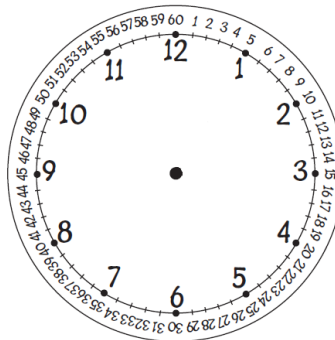
1 HORA
tem
60 MINUTOS

São
01h15m
ou
13h15m

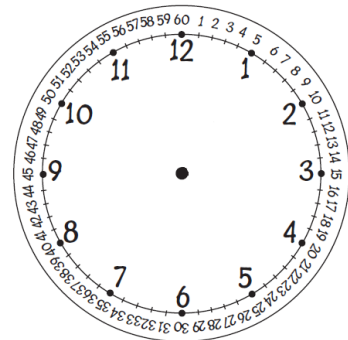
1 – Desenha os ponteiros dos relógios de acordo com as horas indicadas.



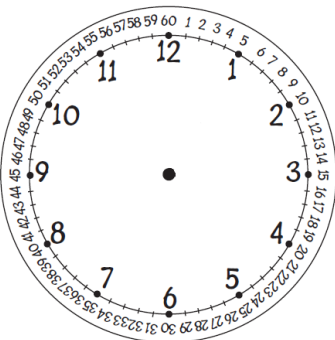
07h30m



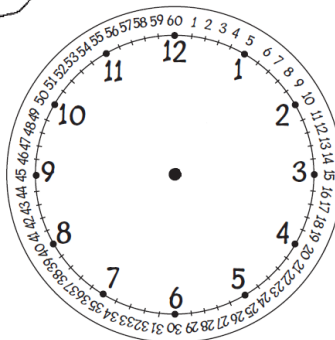
12h15m



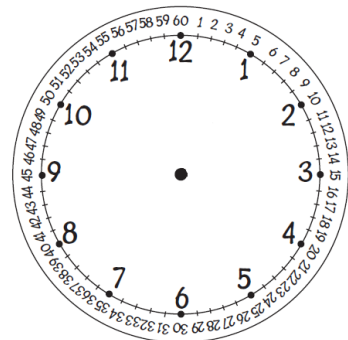
21h00m



09h45m



18h30m










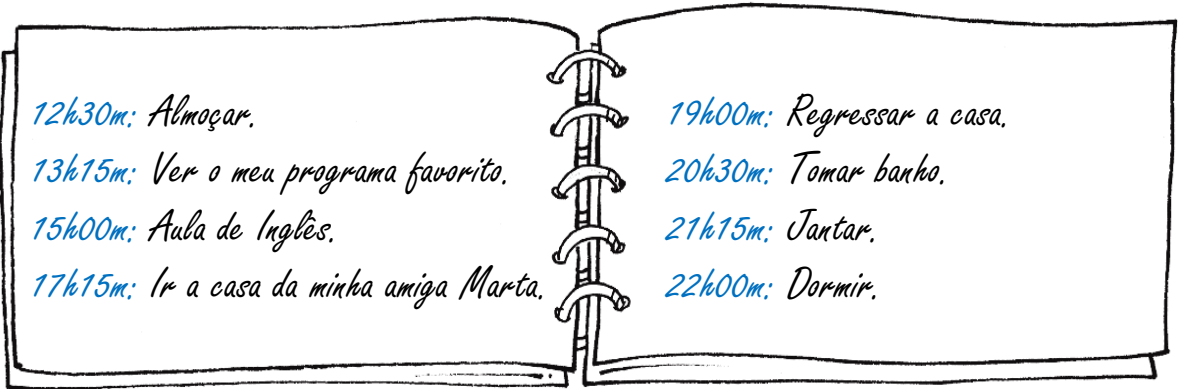
10h15m

Nome : _____

INFORMAÇÃO :

Data : ___/___/___

1 – Estas são as atividades que a Mónica planeou para o resto do dia. Completa os relógios tendo em conta a sua agenda.



Nome : _____


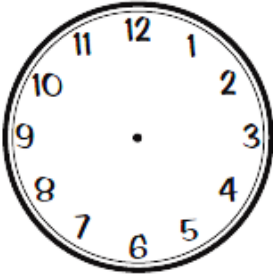
INFORMAÇÃO : _____

Data : ___/___/___

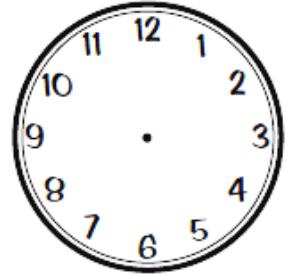
ANTES E DEPOIS

1 – Desenha os ponteiros dos relógios que não os têm.

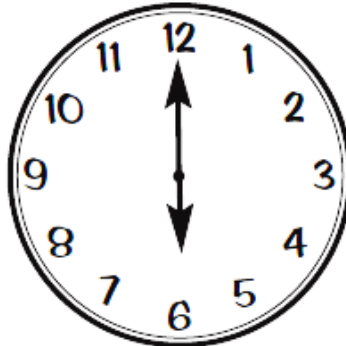
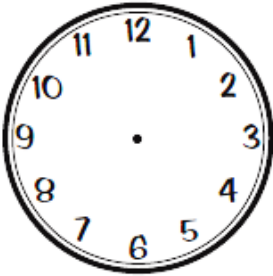
15 MINUTOS ANTES



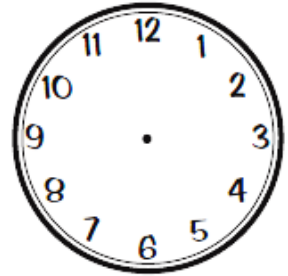
15 MINUTOS DEPOIS



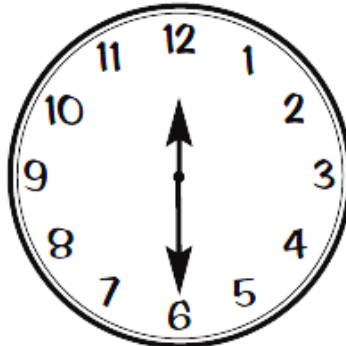
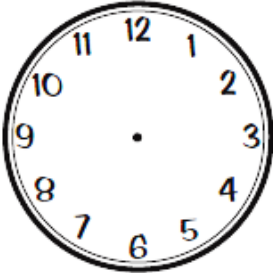
45 MINUTOS ANTES



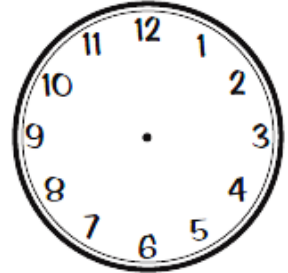
45 MINUTOS DEPOIS




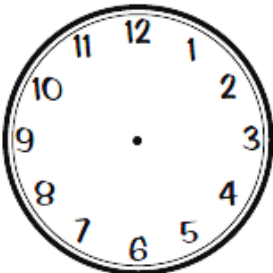
30 MINUTOS ANTES



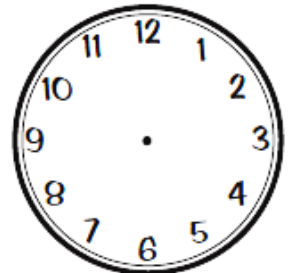
30 MINUTOS DEPOIS



5 MINUTOS ANTES



5 MINUTOS DEPOIS

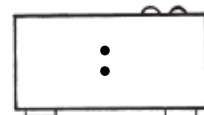
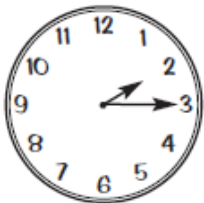
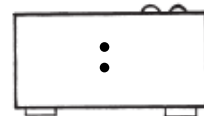
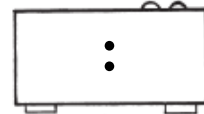
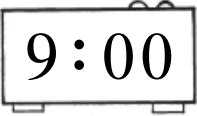


Nome : _____

INFORMAÇÃO : _____

Data : ___/___/___

1 – Escreve as horas assinaladas pelos relógios de ponteiros nos relógios digitais. Une cada relógio com o menino ou a menina que lhe corresponde.



São duas e um quarto



São oito e meia



São nove em ponto



São onze e meia



São cinco e meia



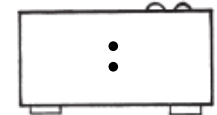
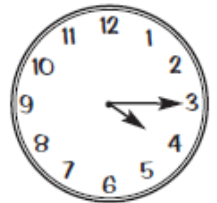
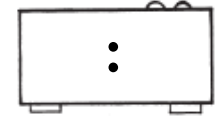
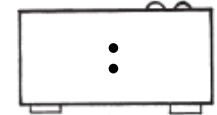
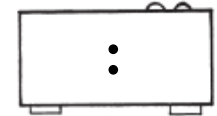
É uma em ponto



São três e um quarto



São quatro e um quarto

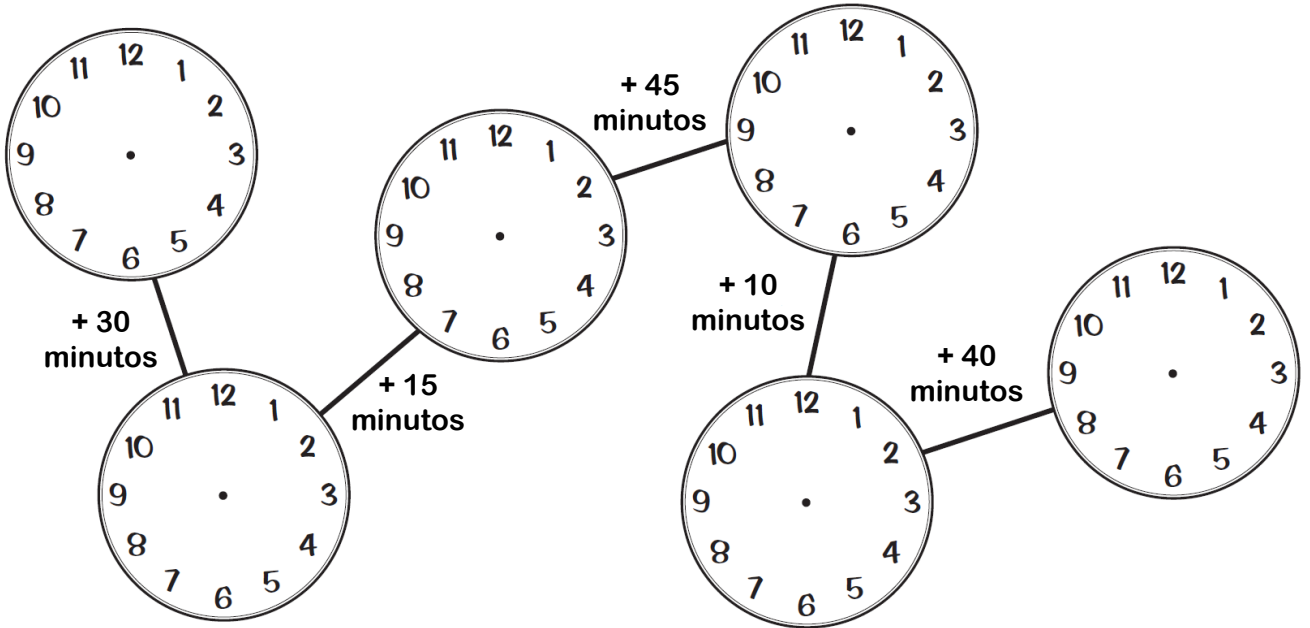


Nome : _____

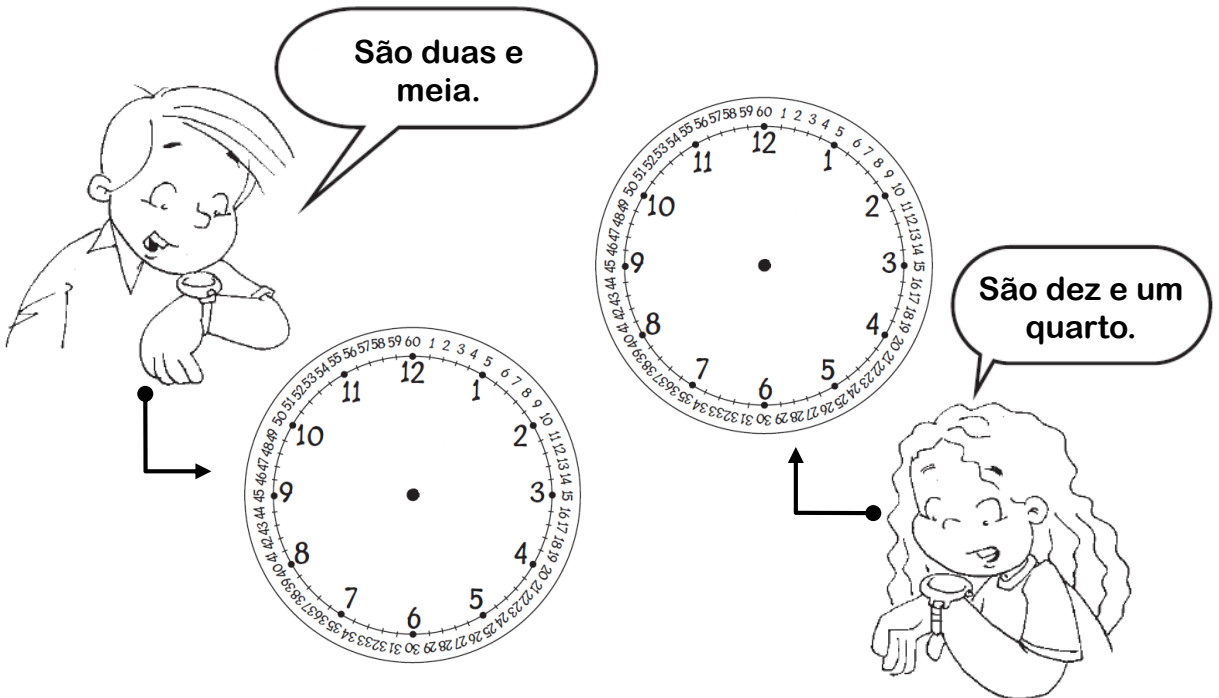
INFORMAÇÃO : _____

Data : ___/___/___

1 – Escreve a hora que está marcada no relógio digital e depois faz as somas indicadas.
Desenha os ponteiros nos relógios.



2 – Desenha os ponteiros nos relógios, de acordo com a indicação dos meninos?

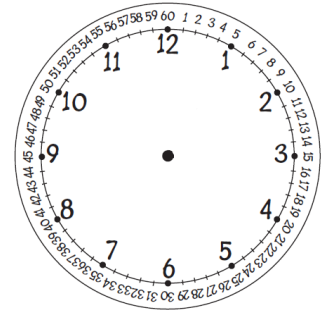
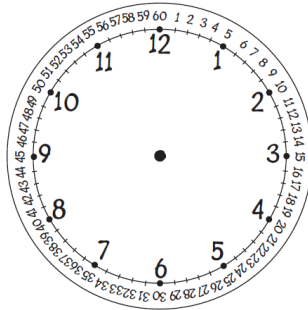
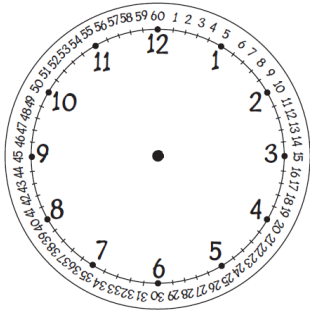
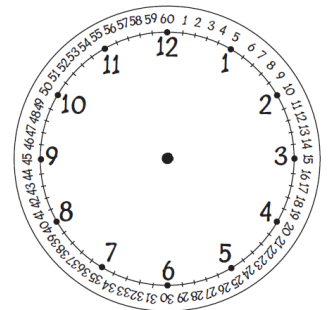
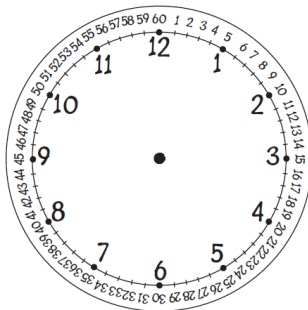
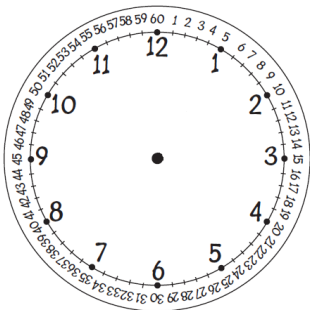
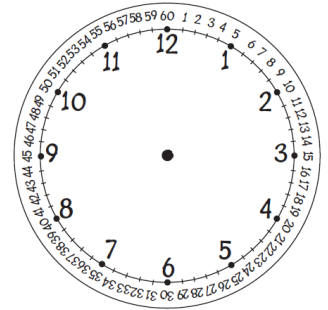
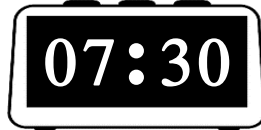
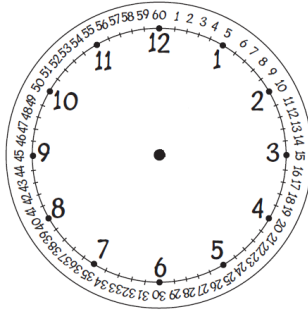
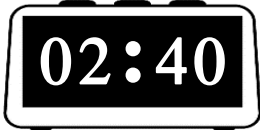
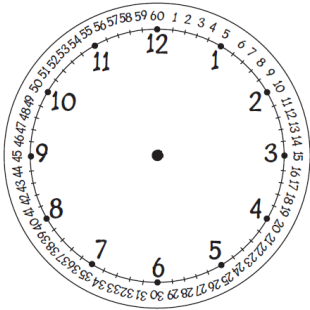


Nome : _____

INFORMAÇÃO :

Data : ___/___/___

1 – Desenha os ponteiros nos relógios, de acordo com a hora que está marcada nos relógios digitais.

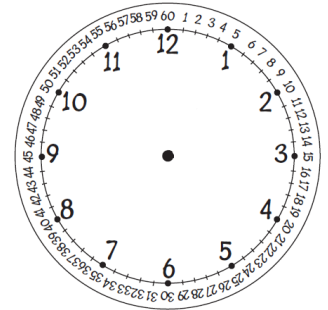
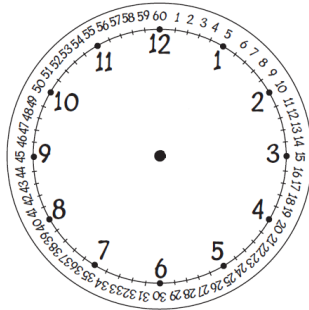
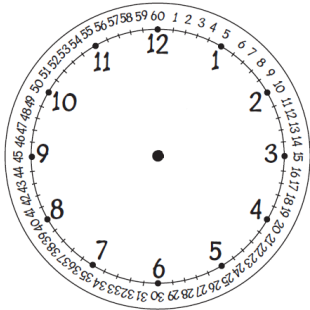
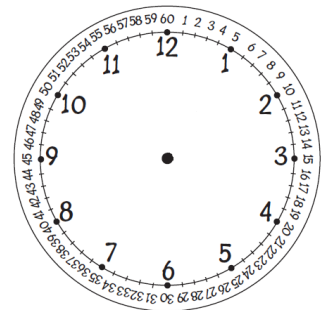
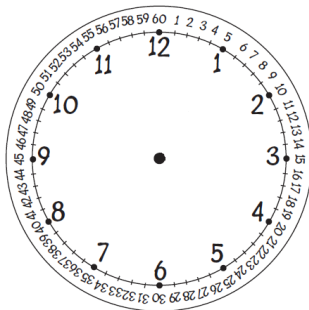
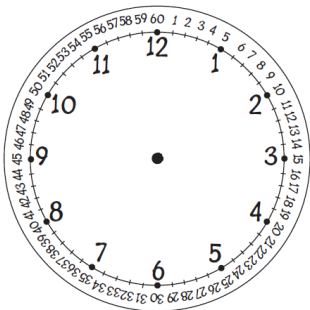
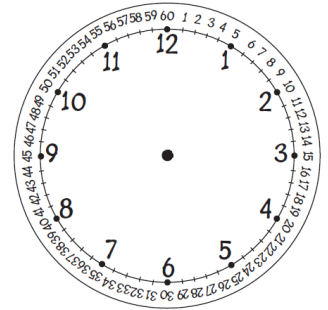
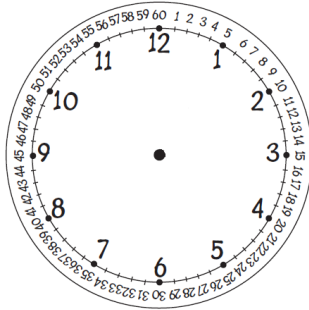
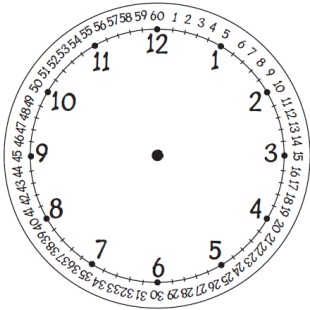


Nome : _____

INFORMAÇÃO :

Data : ___/___/___

1 – Desenha os ponteiros nos relógios, de acordo com a hora que está marcada nos relógios digitais.

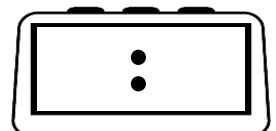
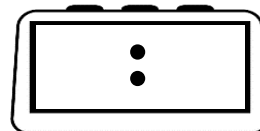

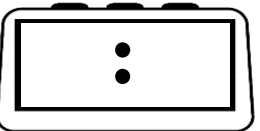

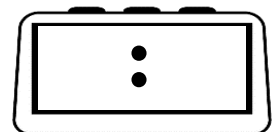
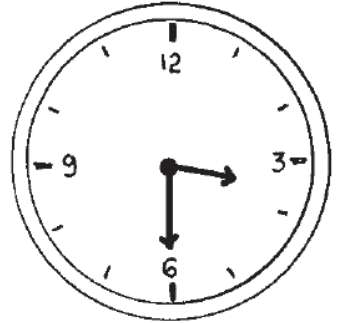
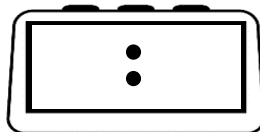
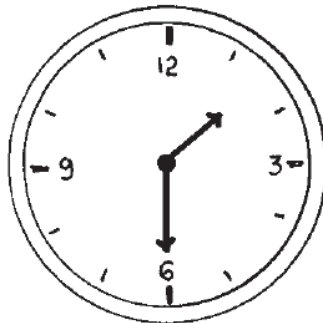
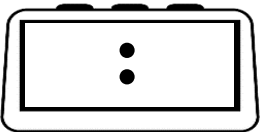
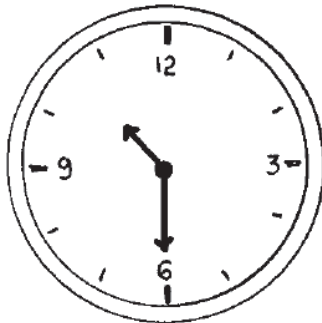
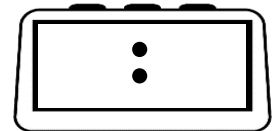
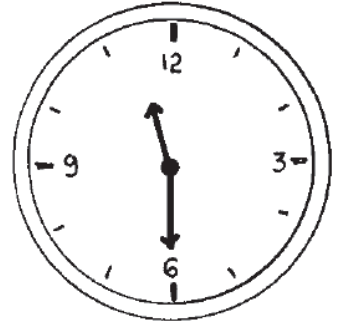



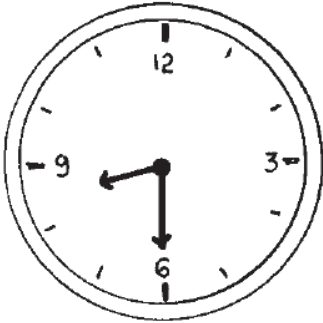


Nome : _____

INFORMAÇÃO : _____

Data : ___/___/___

1 – Escreve a hora que está marcada no relógio analógico.



Nome : _____

INFORMAÇÃO : _____

Data : ___/___/___

1 – Completa as frases com 4, 15 ou quarta parte.1.1 – Um quarto de hora são minutos.1.2 – Cada hora tem quartos de hora.1.3 – 15 minutos é a de uma hora.**2 – Responde e justifica a tua resposta.**

2.1 – Quantos períodos de 5 minutos tem um quarto de hora?

R.: _____

2.2 – Quantos períodos de 10 minutos tem meia hora?

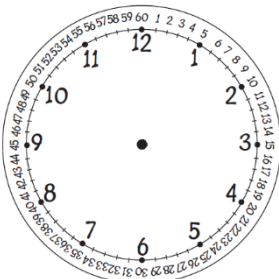
R.: _____

2.3 – Quantos períodos de 10 minutos tem uma hora?

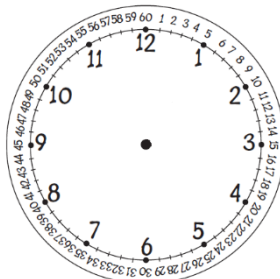
R.: _____

2.4 – Quantos minutos tem meia hora?

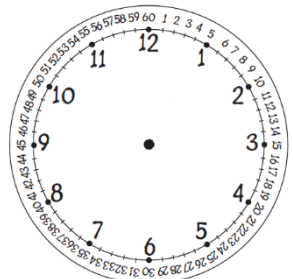
R.: _____

3 – Desenha os ponteiros nos relógios, de acordo com a hora que está marcada nos relógios digitais.

19:45



05:30



12:15

Nome : _____

INFORMAÇÃO : _____

Data : __/__/__

1 – Observa a grelha de programação de 4 canais de televisão, para o mesmo dia.



13:00	Jornal da Tarde
14:15	Windeck – O Preço da Ambição
14:35	Éramos seis
15:15	Verão Total
18:00	Portugal em Direto
19:10	O Preço Certo
20:00	Telejornal
21:00	Bem-vindos a Beirais
21:30	Hotel 5 estrelas
22:20	Portugueses no Mundo



15:15	Suburgatório
15:35	Grandes Livros
16:25	Sociedade Civil
18:00	A Fé dos Homens
18:35	Ler +, Ler melhor
18:45	Zig Zag
21:00	Síntese 24 horas
22:20	Agora (Diários)
22:30	Fringe
23:15	Lado B



13:00	Primeiro Jornal
14:30	Vingança
15:55	Boa Tarde
18:25	Cheias de Charme
20:00	Jornal da Noite
21:45	Dancin' Days
22:45	Avenida Brasil
23:45	Páginas da Vida
00:40	Investigação Criminal LA
01:40	Cartaz Cultural



13:00	Jornal da Uma
14:45	Ninguém como tu
16:00	A tarde é sua
18:00	Doce Fugitiva
19:00	Doida por Ti
20:00	Jornal das 8
21:45	Gang dos Cotas
22:15	Destinos Cruzados
23:30	Mundo ao Contrário
00:30	Segurança Nacional

1.1 – Quanto tempo durou o programa «Éramos seis» do canal RTP?

R.: _____

1.2 – O Miguel chegou da escola às 16 horas, e assistiu ao programa que começava a essa hora.

a) Qual o nome desse programa? R.: _____

b) Quanto tempo durou? R.: _____

1.3 – Escreve a hora de início dos seguintes programas.

a) «Avenida Brasil» do canal SIC. R.: _____

b) «Zig Zag» do canal RTP 2. R.: _____


Nome : _____

INFORMAÇÃO : _____

Data : ___/___/___

1 – O Alberto costuma ler, todos os dias de uma semana, um pouco de um livro de aventuras. Observa o quadro e responde.

Dia da semana	Tempo de leitura em cada dia
sábado	15 minutos
domingo	5 minutos
segunda-feira	10 minutos
terça-feira	30 minutos
quarta-feira	40 minutos
quinta-feira	35 minutos
sexta-feira	20 minutos



1.1 – Qual é a diferença de tempo gasto a ler entre o dia em que leu mais e o dia em que leu menos?

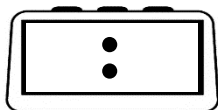
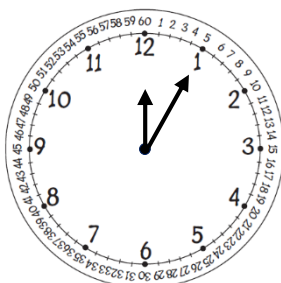
R.: _____

1.2 – Quanto tempo dedicou o Alberto à leitura nos três primeiros dias (sábado, domingo e segunda-feira)?

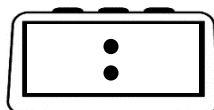
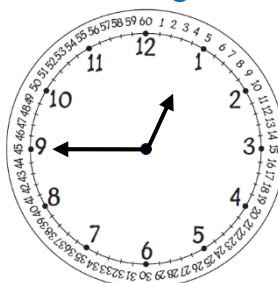
R.: _____

1.3 – Os relógios seguintes marcam a hora em que o Alberto começou a sua leitura em três dias. Escreve a hora em que a leitura do Alberto terminou em cada um dos dias assinalados.

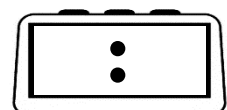
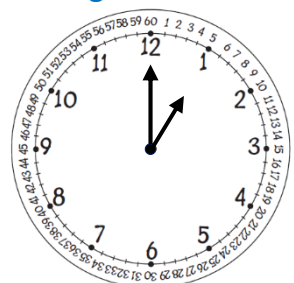
sábado



domingo



segunda-feira



Nome : _____

INFORMAÇÃO : _____

Data : __/__/__

1 – Na tabela que se segue está registado o tempo que seis amigos gastam, por dia, a ver televisão.

Nome	Tempo gasto a ver televisão por dia
Erica	35 minutos
Jessica	Vê mais um quarto de hora do que a Erica
Marco	Vê menos meia hora que a Jessica
Francisco	Vê tanto tempo como a Jessica
Martim	É pequenino e vê menos três quartos de hora do que o Francisco
Alexandra	Vê mais 10 minutos do que o Martim

1.1 – Quais são os dois meninos que passam mais tempo a ver televisão?

R.: _____

1.2 – Qual é a diferença de tempo entre o que vê mais televisão e aquele que vê menos?

R.: _____

1.3 – Quanto tempo falta para que a Jessica veja uma hora de televisão?

R.: _____